

Blowers Green Primary: School at Home **Year 1**

Thursday 30th April 2020

E-mail: yearone@blowers.dudley.sch.uk

Good morning Class 1! Happy International Jazz Day!

Below are your 'School at Home' tasks for today along with any links and resources which will help you to complete your home learning.

As always, you can e-mail me any questions you might have on the e-mail address above. You can also e-mail power point or word-processed tasks to me so I can provide you with feedback on your learning.







All supporting materials and tasks are at the bottom (after the table below). Keep scrolling down to find them!

Good luck and well done for continuing your learning and working so hard! I can't wait to see your work.

Remember, all of your written work should be in your best kinetic letters.

Mrs Perry 😊

Subject	Task	Link/Resources
Literacy	<p>Today it is International Jazz Day - 30th April</p> <p>Create a picture, fact file or poster all about jazz, describe and draw a jazz musical instrument or a jazz musician.</p> <p>Let your creativity guide you! 😊</p>	<p>You can listen to some jazz music here: https://www.youtube.com/watch?v=BlpzhWjQMNE&vl=en</p> <p>Instruments used in jazz music include the piano, trumpet, guitar, saxophone and the double bass.</p>  <p>Can you name any of the instruments above? Can you draw and label one? You could use Purple Mash to draw/label one.</p>

		<h2>Who Is Ella Fitzgerald?</h2> <div>  <div> <p>Ella Fitzgerald was one of the most famous American jazz singers of the twentieth century. She inspired many modern singers including Adele and Lady Gaga.</p> <div>   </div> </div> </div>
Numeracy	<p>Maths activity mat</p> <p>OR 2, 5 and 10 times tables</p>	<p>Maths activity mat (see below)</p> <p>OR practise your times tables using Times Table Rock Stars. If you wish, you can do both! 😊</p>
Phonics	<p>Choose the phase you wish to complete:</p> <p>Phase 2, 3, or 5.</p> <p>See sounds below.</p>	<p>Write each of the sounds on separate posit note/piece of paper. Ask another member of your family to hide them around your house. Go on a sound hunt, when you have found each sound you must bring it to an adult, say the sound and tell them a word with that sound in.</p>
Music	<p>Today it is</p> <p>International Jazz Day - 30th April</p> <p>Listen to some jazz music.</p>	<p>Jazz is a type of music that was popular in 1920s America.</p> <p>This period is often called the 'Jazz Age'.</p> <p>Some famous jazz musicians include:</p> <p>Miles Davis</p> <p>Louis Armstrong</p> <p>Billie Holiday</p> <p>Duke Ellington</p> <p>Ella Fitzgerald</p> <p>Listen to this piece of Miles Davis jazz music.</p> <p>https://www.youtube.com/watch?v=aJOMCmNck1M&list=RDaJOMCmNck1M&start_radio=1&t=139</p> <p>What instruments can you hear?</p> <p>How does it make you feel?</p> <p>Do you like it?</p> <p>What does it make you think of?</p> <p>Is it fast or slow? Loud or quiet?</p>

Science:
Plants

To
complete
across
the week.

Plant a seed, bulb or a bean.

If you don't have any seeds you could use a pip from an apple or an orange.

Take photos or draw pictures explaining how you have planted your seed/bean. Send me a photo of you planting your seed/bean/bulb. 😊 Enjoy!



Section 1

I have 2 pairs of shoes.

How many shoes is that altogether?



Section 4

I have 16p and I lose 5p.

How much money have I got left?



Section 2

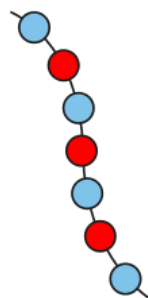
Shep had 3 dog biscuits.

Rover had 4. How many more biscuits did Rover have?



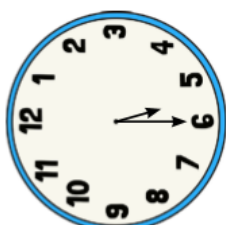
Section 3

Count the beads and write the number.



Section 7

What time is it?



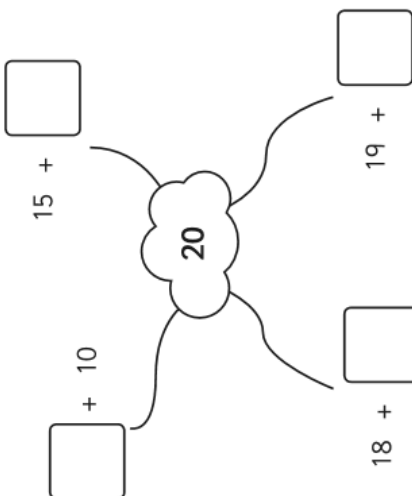
5 o'clock ☐

Half past 6 ☐

Half past 5 ☐


Section 8

Complete the number pairs:



Section 5

Cut the cake in half.



Section 6

What numbers are missing?

9	8	7	6			3		1
---	---	---	---	--	--	---	--	---

Answers

Section 1

I have 2 pairs of shoes.

How many shoes is that altogether?



4

Section 4

I have 16p and I lose 5p.

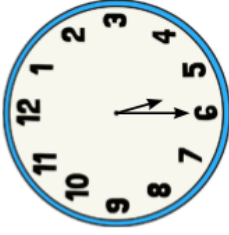
How much money have I got left?



11p

Section 7

What time is it?



5 o'clock

Half past 6

Half past 5

Section 2

Shep had 3 dog biscuits.

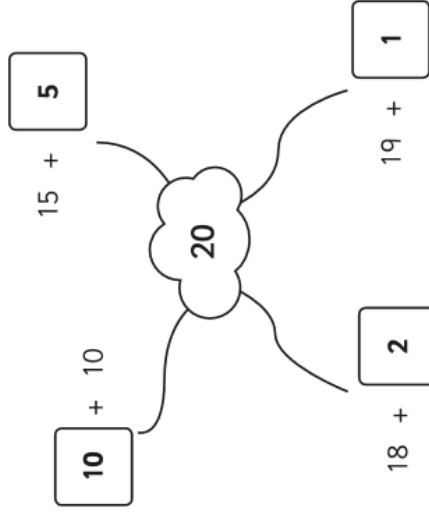
Rover had 4. How many more biscuits did Rover have?



1

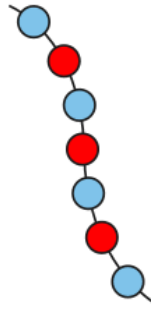
Section 8

Complete the number pairs:



Section 3

Count the beads and write the number.


























7





Section 6

What numbers are missing?

9	8	7	6	5	4	3	2	1
---	---	---	---	---	---	---	---	---

Phase 2-5 sounds

s 	a 	t 	p 	i 	n 	m 	d 
g 	o 	c 	k 	ck 	e 	u 	r 
h 	b 	f 	ff 	l 	ll 	ss 	

j 	v 	w 	x 	y 	z 	zz 	qu 	air 
ch 	sh 	th 	ng 	ai 	ee 	igh 	oa 	ure 
oo 	oo 	ar 	or 	ur 	ow 	oi 	ear 	er 
ay 	ou 	ie 	ea 	oy 	ir 	ue 	ue 	
aw 	wh 	ph 	ew 	ew 	oe 	au 	ey 	
a-e 	e-e* 	i-e 	o-e 	u-e 	u-e 			

*even